

Surname	
Other Names	
Candidate's Signature	

GCSE 9 - 1 Questions

Order of Operation 1

Calculator Not Allowed

INSTRUCTIONS TO CANDIDATES

- Write your name in the space provided.
- Write your answers in the spaces provided in this question paper.
- Answer ALL questions.
- Any working should be clearly shown in the spaces provided since marks may be awarded for partially correct solutions.

Total Marks :

1) Calculate (i) $6 + 8 \times 2$

Answer _____ [1]

(ii) $10 \div 5 + 8 \div 2$

Answer _____ [1]

(iii) $4 \times 12 \div 8 - 6$

Answer _____ [1]

2) Calculate

(a) $8 + 4 \div 2$

Answer _____ [1]

(b) $4 + 2(9 - 3)$

Answer _____ [1]

(c) $5 \times 2 + 14 \div 2$

Answer _____ [1]

3) (a) Calculate

(i) $8 + 6 \div 2$

Answer _____ [1]

(ii) $5 \times 4 - 3 \times 2$

Answer _____ [1]

4) (a) Calculate

(i) $4 + 10 \div 2$

Answer _____ [1]

(ii) $3 + 4(6 - 4)$

Answer _____ [1]

(b) Insert a pair of brackets in order to make this calculation correct.

$$8 - 4 + 6 \div 2 = 1$$

[1]

5) (a) Calculate $12 + 8 \div 2 - 1$

Answer _____ [1]

(b) Write down which of these two statements is correct.

(i) $(15 - 3) \times 6 \div 2 = 6$

(ii) $15 - 3 \times 6 \div 2 = 6$

Answer _____ [2]

6) (a) (i) Calculate $6 + 3 \times 7$

Answer _____ [1]

(b) Calculate $(7 - 2) \times 3$

Answer _____ [1]

(c) Calculate $4 + 5 \times 3$

Answer _____ [1]

7) Calculate

(a) $14 + 6 \div 2$

Answer _____ [1]

(b) $2 \times (3 + 5) - 4$

Answer _____ [1]

8) (a) Kate thought of a number.
She multiplied her number by 9 and got the answer 54.

What number did Kate think of? [1]

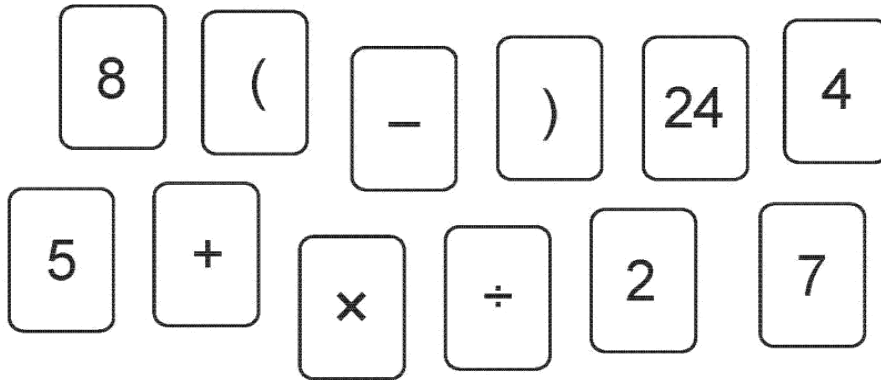
.....
.....

(b) Write a **positive whole number** in each empty box to make this statement true. [1]

$$\boxed{} \times \boxed{8} + \boxed{} = \boxed{21}$$

.....
.....
.....

9)



Use only cards from the selection shown above to create calculations with answers of 60, -7 and 21.

Remember:

- there are no other cards available to use
- a card may be used once only in each calculation
- a complete selection of these cards is available for each calculation.

[3]

For example, to create a calculation with the answer 13,

$$8 + 5 = 13.$$

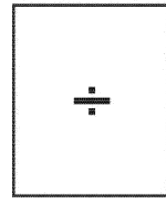
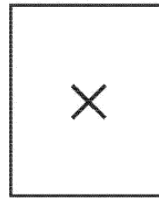

(a) $\quad\quad\quad = 60$

(b) $\quad\quad\quad = -7$

(c) $\quad\quad\quad = 21$

10) Using the signs below, fill in the missing blanks.

[6]



$$23 \quad \square \quad 17 \quad = \quad 40$$

$$100 \quad \square \quad 25 \quad = \quad 75$$

$$36 \quad \square \quad 3 \quad = \quad 12$$

$$4 \quad \square \quad 4 \quad = \quad 16$$

$$2 \quad \square \quad 5 \quad \square \quad 3 \quad = \quad 13$$

$$10 \quad \square \quad 2 \quad \square \quad 5 \quad = \quad 0$$

11)

Write down the answer to each calculation in the space provided.
Match the calculations that have the same answer.
One has been done for you.

[5]

$28 \div (4 + 3)$
 $= \dots\dots\dots$

$-3 - 2$
 $= \dots\dots\dots$

$25 - 6 \times 5$
 $= \dots\dots\dots$

$30 + 18 \div 3$
 $= 36$

6^2
 $= 36$

$0 \cdot 4 \times 5$
 $= \dots\dots\dots$

$21 - 4 \times 3$
 $= \dots\dots\dots$

2^2
 $= \dots\dots\dots$

$-7 + 9$
 $= \dots\dots\dots$

$\sqrt{81}$
 $= \dots\dots\dots$